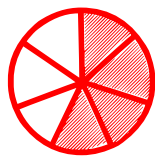


## A Fraction is a Part of

---

Choose the fraction that represents the part of the shaded object.




$$\frac{3}{7}$$

$$\frac{4}{7}$$

$$\frac{5}{7}$$

$$\frac{4}{4}$$




$$\frac{5}{7}$$

$$\frac{5}{8}$$

$$\frac{5}{6}$$

$$\frac{3}{5}$$




$$\frac{2}{2}$$

$$\frac{1}{2}$$

$$\frac{1}{1}$$

$$\frac{3}{4}$$




$$\frac{2}{5}$$

$$\frac{4}{5}$$

$$\frac{5}{5}$$

$$\frac{4}{7}$$



$$\frac{4}{4}$$

$$\frac{5}{5}$$

$$\frac{6}{6}$$

$$\frac{8}{8}$$



$$\frac{2}{5}$$

$$\frac{6}{7}$$

$$\frac{4}{7}$$

$$\frac{1}{8}$$

---