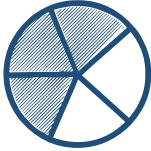
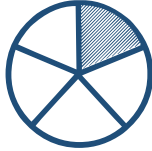


# Identifying Fractions


Choose the correct fraction represented in shape.




$\frac{1}{2}$     $\frac{2}{1}$     $\frac{2}{2}$




$\frac{1}{2}$     $\frac{2}{2}$     $\frac{2}{1}$




$\frac{2}{4}$     $\frac{1}{4}$     $\frac{3}{4}$




$\frac{3}{3}$     $\frac{1}{3}$     $\frac{2}{3}$




$\frac{1}{4}$     $\frac{2}{4}$     $\frac{3}{4}$




$\frac{1}{2}$     $\frac{2}{3}$     $\frac{3}{2}$



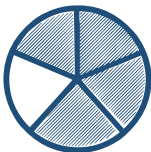
$\frac{1}{4}$     $\frac{3}{4}$     $\frac{2}{4}$




$\frac{1}{2}$     $\frac{2}{4}$     $\frac{3}{2}$




$\frac{1}{2}$     $\frac{3}{4}$     $\frac{4}{3}$



$\frac{1}{4}$     $\frac{3}{4}$     $\frac{2}{4}$



$\frac{1}{2}$     $\frac{2}{4}$     $\frac{3}{2}$



$\frac{1}{2}$     $\frac{3}{4}$     $\frac{4}{3}$