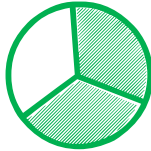

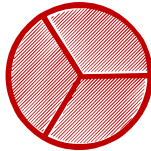











Fraction numerator and denominator

Look at the shape and write fraction of each shape.

| | | | |
|---------------------------|---|---------------------------|---|
| $\frac{\square}{\square}$ |  | $\frac{\square}{\square}$ |  |
| $\frac{\square}{\square}$ |  | $\frac{\square}{\square}$ |  |
| $\frac{\square}{\square}$ |  | $\frac{\square}{\square}$ |  |
| $\frac{\square}{\square}$ |  | $\frac{\square}{\square}$ |  |
| $\frac{\square}{\square}$ |  | $\frac{\square}{\square}$ |  |
| $\frac{\square}{\square}$ |  | $\frac{\square}{\square}$ |  |