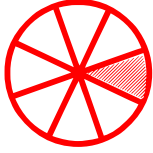


# A Fraction is a Part of

---

Choose the fraction that represents the part of the shaded object.




$\frac{2}{8}$

$\frac{1}{8}$

$\frac{3}{8}$

$\frac{7}{8}$

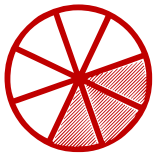


$\frac{2}{8}$

$\frac{3}{8}$

$\frac{1}{8}$

$\frac{8}{8}$



$\frac{2}{6}$

$\frac{4}{8}$

$\frac{3}{6}$

$\frac{3}{8}$



$\frac{4}{6}$

$\frac{4}{8}$

$\frac{2}{8}$

$\frac{1}{8}$



$\frac{5}{8}$

$\frac{6}{8}$

$\frac{4}{8}$

$\frac{2}{8}$



$\frac{4}{8}$

$\frac{5}{8}$

$\frac{6}{8}$

$\frac{4}{8}$