


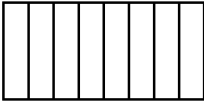



## Fractions: Understanding the fractions notations

Fill out the following table.

	fraction	Numerator (Dividend)	Denominator (Divisor)	Fraction in words	graphical representation
a)	$\frac{3}{5}$	3	5	three fifths	
b)		2	3		
c)				four fifths	
d)					
e)		4			
f)	$\frac{\square}{5}$	3			
g)	$\frac{2}{\square}$		6		
h)	$\frac{3}{\square}$			.... quarters	
i)				six.....	
j)	$\frac{3}{\square}$				
k)		2		..... fifths	